


Compte sur chaque ligne le nombre de poissons et entoure le bon chiffre.



3

4


6



2

1


5



5

4

6



6

8

5



6

5


7



3

5

7



7

4

9



9

6


10



6

8

7



4

8

4



10

8

6




7

2

8

Compte sur chaque ligne le nombre de poissons et entoure le bon chiffre.



3

2

6



2

1

5



5

4

6



6

8

5



6

5

7



3

5

7



7

3

9



9

6


10



6

5

7



4

8

4



10

8

9



7

3

8

Compte sur chaque ligne le nombre de poissons et entoure le bon chiffre.



3

2

6



2

1


5



5

4


6



6

9

5



6

5


7



3

5


7



7

4

9



9

2


3



6

5

7



4

8

4



10

8

9



7

3

8