



















Nom :
Date :

## De 0 à 6


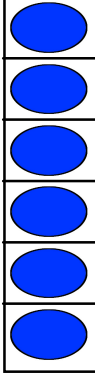

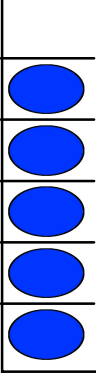















1. Écris le nombre de pattes.

			
<input type="text"/>	<input type="text"/>	<input type="text"/>	<input type="text"/>
.....	.....	.....	.....
			
<input type="text"/>	<input type="text"/>	<input type="text"/>	<input type="text"/>
.....	.....	.....	.....

























2. Écris le nombre de carrés, de rayés, de cercles.

					<table border="1"> <tr> <td>Carrés</td> <td>.....</td> </tr> <tr> <td>Rayés</td> <td>.....</td> </tr> <tr> <td>Cercles</td> <td>.....</td> </tr> </table>	Carrés	.....	Rayés	.....	Cercles	.....
Carrés	.....										
Rayés	.....										
Cercles	.....										
											
											

3. Complète l'étiquette nombre.

<input type="text"/>	<input type="text"/>	<input type="text"/>	<input type="text"/>
			
			
			
			
			
			
<input type="text"/>	<input type="text"/>	<input type="text"/>	<input type="text"/>
.....	.....	.....	.....

4. Dessine autant de points.

<input type="text"/>	<input type="text"/>	<input type="text"/>	<input type="text"/>
			
			
			
			
			
			
<input type="text"/>	<input type="text"/>	<input type="text"/>	<input type="text"/>
3	1	0	6